

ADVANCED HIGH SCHOOL MATHEMATICS

COMPLEX NUMBERS

ARITHMETIC OPERATIONS WITH COMPLEX VARIABLES

You need to gain the ability to add, subtract, multiply and divide complex numbers.

The addition, subtraction, multiplication or division of two complex variables z_1 and z_2

$$z_1 = x_1 + i y_1 \quad z_2 = x_2 + i y_2 \quad x_1, y_1, x_2, y_2 \text{ real numbers}$$

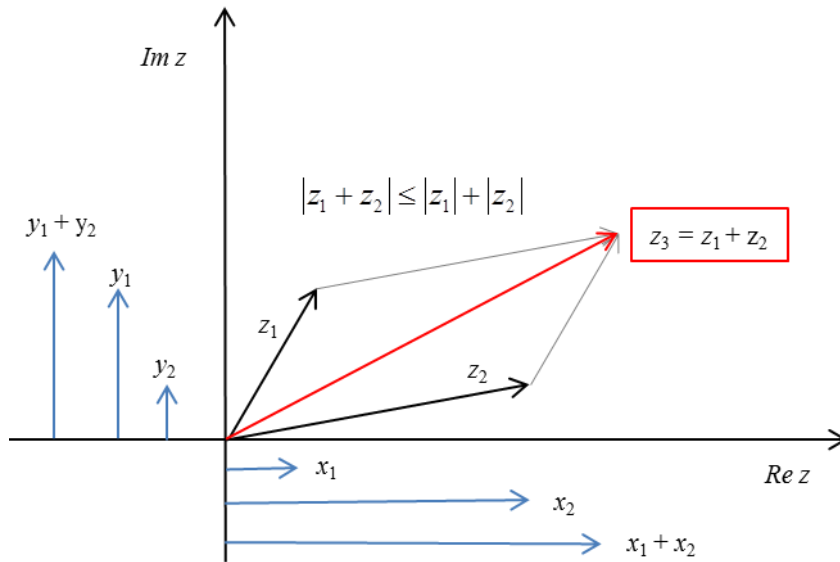
produces other complex variables

Addition

$$z_3 = z_1 + z_2 = x_1 + i y_1 + x_2 + i y_2$$

add real parts add imaginary parts

$$z_3 = (x_1 + x_2) + i (y_1 + y_2)$$



The vector representing $z_3 = z_1 + z_2$ corresponds to the diagonal of a parallelogram with the vectors z_1 and z_2 as adjacent sides.

From the parallelogram, it is obvious that

$$|z_1 + z_2| \leq |z_1| + |z_2|$$

Subtraction

$$z_4 = z_1 - z_2 = x_1 + i y_1 - (x_2 + i y_2) \quad \text{subtract real parts} \quad \text{subtract imaginary parts}$$

$$z_4 = (x_1 - x_2) + i (y_1 - y_2)$$

For subtraction using the Argand diagram simply add the vectors z_1 and $-z_2$

$$z_4 = z_1 - z_2 = z_1 + (-z_2)$$

Multiplication

$$z_5 = z_1 z_2 = (x_1 + i y_1)(x_2 + i y_2) = (x_1 x_2 - y_1 y_2) + i (x_1 y_2 + x_2 y_1)$$

Division

$$z_6 = \frac{z_1}{z_2} = \frac{z_1 \bar{z}_2}{z_2 \bar{z}_2}$$

Multiply both the numerator and denominator by the complex conjugate of the denominator so that you are now dividing by the real number $z_2 \bar{z}_2$.

Multiplication or division of two complex numbers is accomplished most easily when they are in exponential form.

$$z_5 = z_1 z_2 = (R_1 e^{i\theta_1})(R_2 e^{i\theta_2}) = R_1 R_2 e^{i(\theta_1+\theta_2)} = R_1 R_2 \angle(\theta_1 + \theta_2)$$

$$= R_1 R_2 [\cos(\theta_1 + \theta_2) + i \sin(\theta_1 + \theta_2)]$$

$$z_6 = \frac{z_1}{z_2} = \left(\frac{R_1}{R_2}\right) e^{i(\theta_1-\theta_2)} = \left(\frac{R_1}{R_2}\right) \angle(\theta_1 - \theta_2)$$

$$= R_1 R_2 [\cos(\theta_1 - \theta_2) + i \sin(\theta_1 - \theta_2)]$$

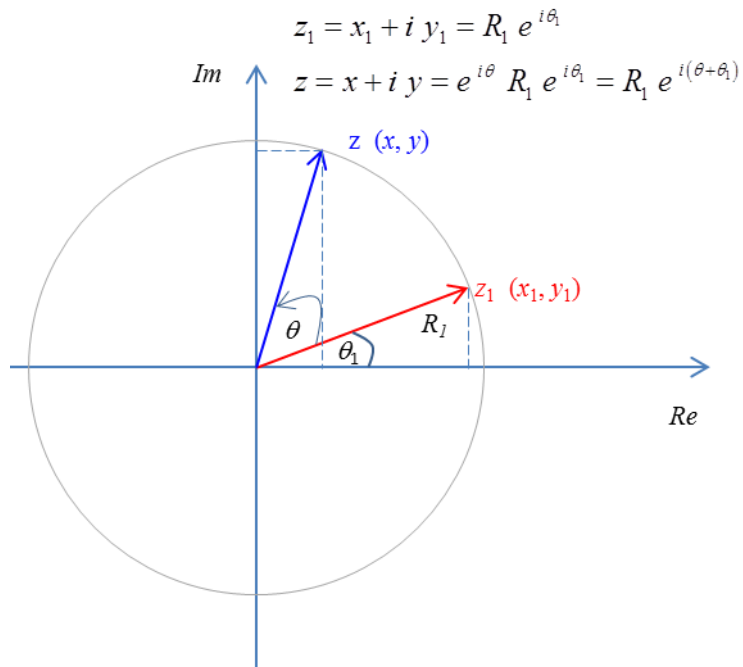
A complex number can be shown as a vector on an Argand diagram.

$$z_1 = x_1 + i y_1 = R_1 e^{i\theta_1} \quad R_1 = \sqrt{x_1^2 + y_1^2} \quad \tan \theta_1 = \frac{y_1}{x_1}$$

We will consider the result of multiplying the complex number z_1 by the complex number $e^{i\theta}$

$$z = e^{i\theta} R_1 e^{i\theta_1} = R_1 e^{i(\theta+\theta_1)}$$

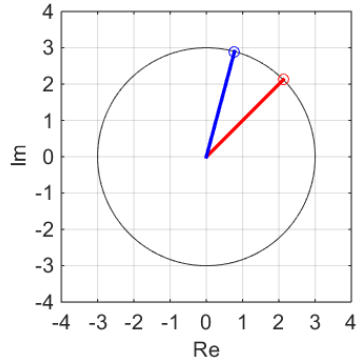
This means that the vector for z_1 is rotated anticlockwise about the origin through an angle θ to produce the vector for the new vector z .



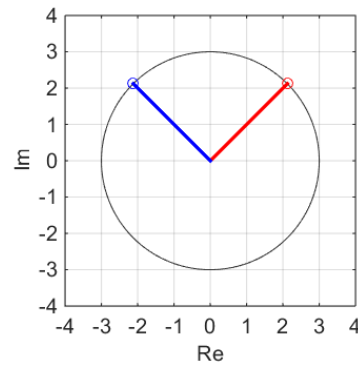
$$z = e^{i\theta} \quad z_1 = R_1 e^{i\theta_1} = R_1 e^{i(\theta+\theta_1)}$$

$$\text{Let } z_1 = 3e^{i(\pi/4)} = 3\left[\cos\left(\frac{\pi}{4}\right) + i\sin\left(\frac{\pi}{4}\right)\right] = 2.1213(1+i)$$

$$\begin{aligned} \theta = \pi/6 \quad z &= 3\left(e^{i(\pi/6+\pi/4)}\right) = 3e^{i(5\pi/12)} \\ &= 0.7765 + i(2.8978) \end{aligned}$$

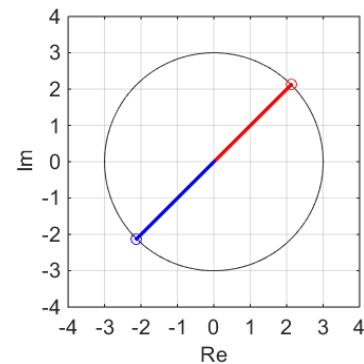


$$\begin{aligned} \theta = \pi/2 \quad z &= \left(e^{i(\pi/2)}\right)\left(3e^{i(\pi/4)}\right) \\ z &= \left[\cos\left(\frac{\pi}{2}\right) + i\sin\left(\frac{\pi}{2}\right)\right]\left(3e^{i(\pi/4)}\right) \\ z &= i\left(3e^{i(\pi/4)}\right) = -2.1213 + i(2.1213) \end{aligned}$$

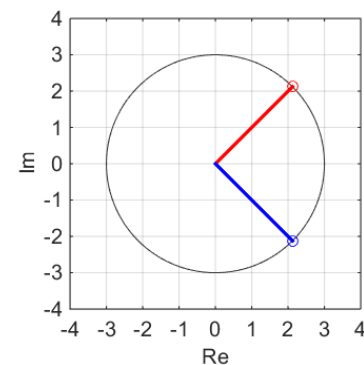


Multiplication by i produces an anticlockwise rotation by $(\pi/2)$ rad.

$$\begin{aligned} \theta = \pi \quad z &= \left(e^{i\pi}\right)\left(3e^{i(\pi/4)}\right) \\ z &= \left[\cos(\pi) + i\sin(\pi)\right]\left(3e^{i(\pi/4)}\right) \\ z &= -\left(3e^{i(\pi/4)}\right) = -\left[2.1213 + i(2.1213)\right] = -z_1 \end{aligned}$$



$$\begin{aligned} \theta = 3\pi/2 \quad z &= \left(e^{i(3\pi/2)}\right)\left(3e^{i(\pi/4)}\right) \\ z &= \left(e^{i(2\pi-\pi/2)}\right)\left(3e^{i(\pi/4)}\right) \\ z &= \left(e^{i(-\pi/2)}\right)\left(3e^{i(\pi/4)}\right) \\ z &= \left[\cos\left(-\frac{\pi}{2}\right) + i\sin\left(-\frac{\pi}{2}\right)\right]\left(3e^{i(\pi/4)}\right) \\ z &= -i\left(3e^{i(\pi/4)}\right) = 2.1213 - i(2.1213) \end{aligned}$$



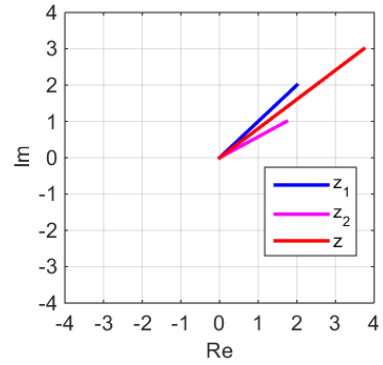
Clockwise rotation of z_1 through $(\pi/2)$ rad.

Example

Consider the two vectors $z_1 = 2 + 2i$ $z_2 = \sqrt{3} + i$

Find $z = z_1 + z_2$

$$z = z_1 + z_2 = (2 + \sqrt{3}) + (2 + 1)i = 3.7321 + 3.0000i$$



Find the magnitudes and arguments of z_1 , z_2 and z

Know $z = x + iy$ $|z| = R = \sqrt{x^2 + y^2}$ $Arg(z) = \theta = a \tan\left(\frac{y}{x}\right)$

$$|z_1| = R_1 = \sqrt{2^2 + 2^2} = 2.8284 \quad Arg(z) = \theta_1 = a \tan\left(\frac{2}{2}\right) = 0.7854 \text{ rad} = 45^\circ$$

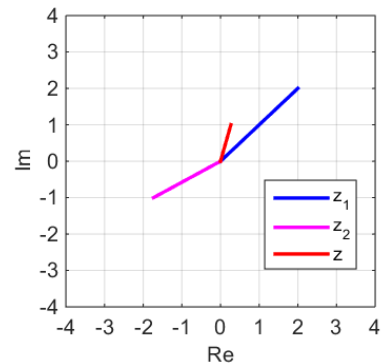
$$|z_2| = R_2 = \sqrt{\sqrt{3}^2 + 1^2} = 2.0000 \quad Arg(z) = \theta_2 = a \tan\left(\frac{1}{\sqrt{3}}\right) = 0.5236 \text{ rad} = 30^\circ$$

$$|z| = R = \sqrt{3.7321^2 + 3^2} = 4.7883 \quad Arg(z) = \theta = a \tan\left(\frac{3}{3.7321}\right) = 0.6771 \text{ rad} = 38.7940^\circ$$

Find $z = z_1 - z_2$

$$z_1 = 2x + 2i \quad -z_2 = -(\sqrt{3}x + i)$$

$$z = z_1 - z_2 = z_1 + (-z_2) = (2 - \sqrt{3}) + (2 - 1)i \\ = 0.28284 + 1.0000i$$



- $|z| = |z_1 - z_2| = \sqrt{(x_1 - x_2)^2 + (y_1 - y_2)^2}$ hence the magnitude of the complex number $|z_1 - z_2|$ is equal to the distance between the two points $z_1(x_1, y_1)$ and $z_2(x_2, y_2)$ on the Argand diagram $\sqrt{(x_1 - x_2)^2 + (y_1 - y_2)^2}$.
- $\theta = Arg(z_1 - z_2) = \text{atan}\left(\frac{y_2 - y_1}{x_2 - x_1}\right)$ but $\left(\frac{y_2 - y_1}{x_2 - x_1}\right)$ is the slope of the line joining the two points $z_1(x_1, y_1)$ and $z_2(x_2, y_2)$ on the Argand diagram and so, $\theta = Arg(z_1 - z_2)$ is equal to the angle this line makes with the horizontal direction (line parallel to the real axis) as measured in an anticlockwise sense with respect to the horizontal.

Find $z = z_1 z_2$

$$z = x + iy \quad z_1 = x_1 + iy_1 \quad z_2 = x_2 + iy_2$$

Know $z = z_1 z_2 = (x_1 x_2 - y_1 y_2) + i(x_1 y_2 + x_2 y_1)$

$$|z| = \sqrt{x^2 + y^2} \quad \text{Arg}(z) = \theta = a \tan\left(\frac{y}{x}\right)$$

$$z = ((2)(\sqrt{3}) - (2)(1)) + i((2)(1) + (\sqrt{3})(2)) = 1.4641 + 5.4641i$$

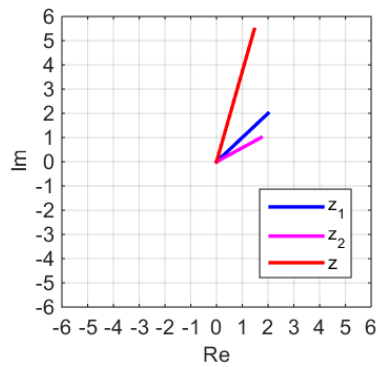
$$|z| = R = \sqrt{1.4641^2 + 5.4641^2} = 5.6569$$

$$\text{Arg}(z) = \theta = a \tan\left(\frac{5.4641}{1.4641}\right) = 1.3090 \text{ rad} = 75^\circ$$

Know $z = R e^{i\theta} = (R_1 e^{i\theta_1})(R_2 e^{i\theta_2}) = R_1 R_2 e^{i(\theta_1 + \theta_2)}$

$$z = (2.8284)(2) e^{i(0.7854 + 0.5236)} = 5.6569 e^{i(1.3090)}$$

$$|z| = R = 5.6569 \quad \text{Arg}(z) = \theta = 1.3090 \text{ rad} = 75^\circ \quad (75^\circ = 45^\circ + 30^\circ)$$



Find $z = \frac{z_1}{z_2}$

$$z = x + iy \quad z_1 = x_1 + iy_1 \quad z_2 = x_2 + iy_2$$

Know
$$z = \frac{z_1 \bar{z}_2}{z_2 \bar{z}_2} = \frac{z_1 \bar{z}_2}{|\bar{z}_2|^2} = \frac{(x_1 x_2 + y_1 y_2) + i(-x_1 y_2 + x_2 y_1)}{x_2^2 + y_2^2}$$

$$|z| = \sqrt{x^2 + y^2} \quad \text{Arg}(z) = \theta = a \tan\left(\frac{y}{x}\right)$$

$$x_1 = 2 \quad y_1 = 2 \quad x_2 = \sqrt{3} \quad y_2 = 1 \quad |z_2| = 2$$

$$z = \frac{(2\sqrt{3} + 2) + i(-2 + 2\sqrt{3})}{4} = 1.3660 + 0.3660i$$

$$|z| = R = \sqrt{1.3660^2 + 0.3660^2} = 1.4142$$

$$\text{Arg}(z) = \theta = a \tan\left(\frac{0.3660}{1.3660}\right) = 0.2618 \text{ rad} = 15^\circ$$

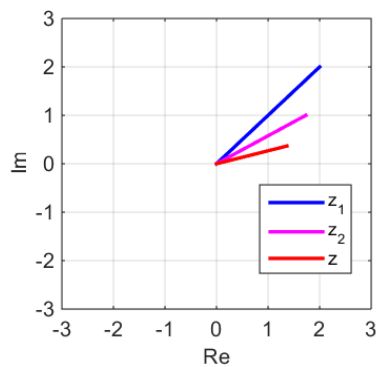
Know
$$z = R e^{i\theta} = (R_1 e^{i\theta_1})(R_2 e^{i\theta_2}) = R_1 R_2 e^{i(\theta_1 + \theta_2)}$$

$$R_1 = 2.8284 \quad \theta_1 = 0.7854 \text{ rad} = 45^\circ$$

$$R_2 = \sqrt{\sqrt{3} + 1^2} = 2.0000 \quad \theta_2 = 0.5236 \text{ rad} = 30^\circ$$

$$z = \frac{z_1}{z_2} = \left(\frac{R_1}{R_2}\right) e^{i(\theta_1 - \theta_2)} = \left(\frac{2.8284}{2}\right) e^{i(0.7854 - 0.5236)} = 1.4142 e^{i(0.2618)}$$

$$|z| = R = 1.4142 \quad \text{Arg}(z) = \theta = 0.2618 \text{ rad} = 15^\circ \quad (15^\circ = 45^\circ - 30^\circ)$$



Modulus and Complex conjugate relationships

- $|z_1 z_2| = |z_1| |z_2| \quad \arg(z_1 z_2) = \arg(z_1) + \arg(z_2)$

Proof

$$z_1 = R_1 e^{i\theta_1} \quad z_2 = R_2 e^{i\theta_2} \quad z_1 z_2 = (R_1 e^{i\theta_1})(R_2 e^{i\theta_2}) = R_1 R_2 e^{i(\theta_1 + \theta_2)}$$

$$|z_1| = R_1 \quad |z_2| = R_2 \quad |z_1 z_2| = R_1 R_2 = |z_1| |z_2|$$

$$\arg(z_1) = \theta_1 \quad \arg(z_2) = \theta_2 \quad \arg(z_1 z_2) = \theta_1 + \theta_2 = \arg(z_1) + \arg(z_2)$$

- $\left| \frac{z_1}{z_2} \right| = \frac{|z_1|}{|z_2|} \quad \arg\left(\frac{z_1}{z_2}\right) = \arg(z_1) - \arg(z_2)$

Proof

$$z_1 = R_1 e^{i\theta_1} \quad z_2 = R_2 e^{i\theta_2} \quad \frac{z_1}{z_2} = \frac{R_1 e^{i\theta_1}}{R_2 e^{i\theta_2}} = \frac{R_1}{R_2} e^{i(\theta_1 - \theta_2)}$$

$$|z_1| = R_1 \quad |z_2| = R_2 \quad \left| \frac{z_1}{z_2} \right| = \frac{R_1}{R_2} = \frac{|z_1|}{|z_2|}$$

$$\arg(z_1) = \theta_1 \quad \arg(z_2) = \theta_2 \quad \arg\left(\frac{z_1}{z_2}\right) = \theta_1 - \theta_2 = \arg(z_1) - \arg(z_2)$$

- $|z^n| = |z|^n \quad \arg(z^n) = n \arg(z)$

Proof

$$z = R e^{i\theta} \quad z^n = R^n e^{in\theta}$$

$$|z|^n = R^n = |z|^n \quad \arg(z^n) = n\theta = n \arg(z)$$

- $z_1^* + z_2^* = (z_1 + z_2)^* \quad (z_1 z_2)^* = z_1^* z_2^* \quad *$ used for complex conjugate

Proof

$$z_1 = x_1 + i y_1 \quad z_2 = x_2 + i y_2 \quad z_1 + z_2 = (x_1 + x_2) + i (y_1 + y_2)$$

$$z_1^* = x_1 - i y_1 \quad z_2^* = x_2 - i y_2 \quad (z_1 + z_2)^* = (x_1 + x_2) - i (y_1 + y_2)$$

$$z_1^* + z_2^* = (z_1 + z_2)^*$$

$$z_1 = R_1 e^{i\theta_1} \quad z_1^* = R_1 e^{-i\theta_1} \quad z_2 = R_2 e^{i\theta_2} \quad z_2^* = R_2 e^{-i\theta_2}$$

$$(z_1 z_2)^* = R_1 R_2 e^{-i(\theta_1 + \theta_2)} = (R_1 e^{-i\theta_1})(R_2 e^{-i\theta_2}) = z_1^* z_2^*$$

QUADRATIC FUNCTION

A quadratic function has the general form

$$ax^2 + bx + c = 0 \quad a \neq 0$$

and its graph is a **parabola**.

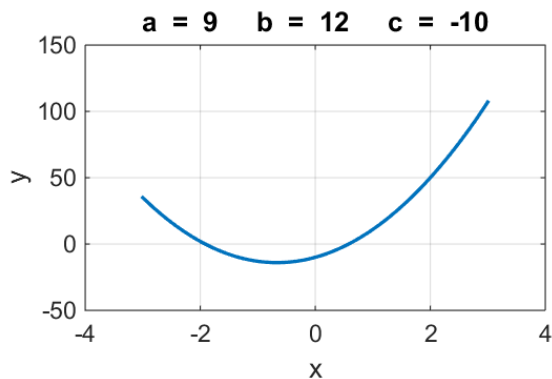
If there are real values of x for which the quadratic function $ax^2 + bx + c = 0$ then the curve will intersect the X axis at the values of x given by the formula

$$x = \frac{-b \pm \sqrt{b^2 - 4ac}}{2a}$$

Two real roots when the parabola crosses the X axis twice

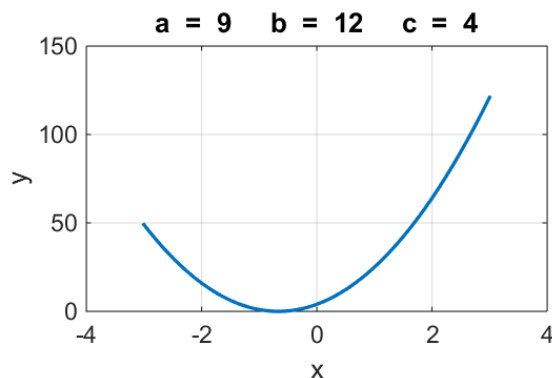
$$x_1 = 0.5806$$

$$x_2 = -1.9139$$



When the parabola touches the X axis at one point, there is only one real root

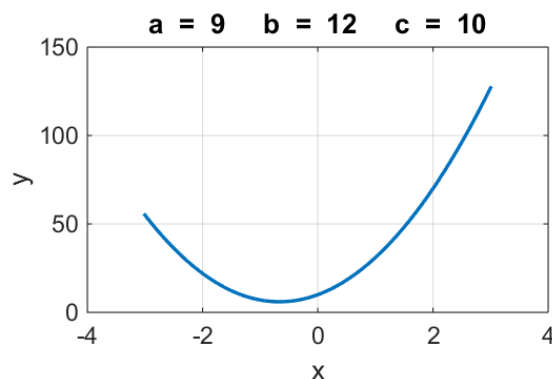
$$x_1 = x_2 = -0.6667$$



There are no real roots when the parabola does not cut the X axis. The **two** roots are now **imaginary**

$$x_1 = -0.6667 + i(0.8165)$$

$$x_2 = -0.6667 - i(0.8165)$$



Example

OABC is a square on an Argand diagram. The point A is given by the ordered pair (has the ordered $(\sqrt{3}, 1)$). Find the complex numbers for the points B and C.

$$z_A = x_A + i y_A = \sqrt{3} + i$$

$$|z_A| = R_A = \sqrt{x_A^2 + y_A^2} = \sqrt{\sqrt{3}^2 + 1^2} = 2$$

$$\text{Arg}(z_A) = \theta_A = a \tan\left(\frac{1}{\sqrt{3}}\right) = 0.5236 \text{ rad} = 30^\circ$$

The angle between OA and OC must be 90° . Multiplication by i produces an anticlockwise rotation of 90° ($\pi/2$ rad). Therefore, we can determine the coordinates of the point C from

$$z_C = i z_A = -1 + \sqrt{3} i$$

Hence the order pair for C is $(-1, \sqrt{3})$ or $(-1, 1.7321)$.

$$|z_C| = R_C = \sqrt{x_C^2 + y_C^2} = \sqrt{1^2 + \sqrt{3}^2} = 2$$

$$\text{Arg}(z_C) = \theta_C = \pi - a \tan\left(\left|\frac{-\sqrt{3}}{1}\right|\right) = 2.0944 \text{ rad} = 120^\circ$$

OB must correspond to the diagonal of the square whose side length is $|z| = R_A = 2$.

$$\text{Hence, } |z_B| = R_B = \sqrt{2^2 + 2^2} = 2.8284$$

The angle between the side OA and the diagonal OB is 45° ($\pi/4$ rad). Therefore,

$$\theta_B = \theta_A + 45^\circ = 30^\circ + 45^\circ = 1.3090 \text{ rad}$$

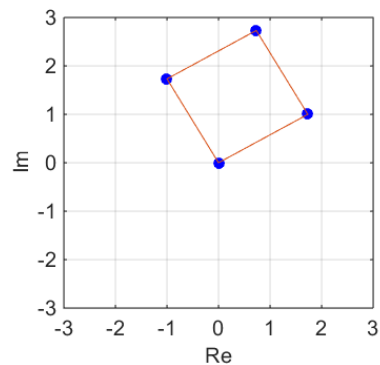
Hence the complex number z_B is

$$z_B = 2.8284 e^{i(1.3090)}$$

$$x_B = R_B \cos \theta = (2.8284) \cos(1.3090) = 0.7320$$

$$y_B = R_B \sin \theta = (2.8284) \sin(1.3090) = 2.7320$$

Hence the order pair for B is $(0.7320, 2.7320)$.



The square is now rotated about O through an angle of 60° ($\pi/3$ rad) in a clockwise direction. Find the ordered pairs for the vertices of the square A_1 , B_1 and C_1 .

know multiplication of a complex number z by the complex number $e^{-i(\frac{\pi}{3})}$ corresponds to a rotation of the vector representing z on an Argand diagram through an angle ($\pi/3$) rad in a clockwise direction.

$$z_1 = e^{-i(\frac{\pi}{3})} z = e^{-i(\frac{\pi}{3})} R e^{i\theta} = R e^{i(\theta - \frac{\pi}{3})}$$

The new vertices of the square A_1 , B_1 and C_1 are determined by the rotation of the vectors representing z_A , z_B and z_C by ($\pi/3$) rad

$$z_{A1} = R_A e^{i(\theta_A - \frac{\pi}{3})} = 2 e^{i(0.5236 - \frac{\pi}{3})} = 2 e^{i(-0.5236)}$$

$$z_{B1} = R_B e^{i(\theta_B - \frac{\pi}{3})} = 2.8284 e^{i(1.3090 - \frac{\pi}{3})} = 2.8284 e^{i(0.2618)}$$

$$z_{C1} = R_C e^{i(\theta_C - \frac{\pi}{3})} = 2 e^{i(2.0944 - \frac{\pi}{3})} = 2 e^{i(1.0472)}$$

$$\theta_{A1} = -0.5236 \text{ rad} = -30^\circ \quad \theta_{B1} = 0.2618 \text{ rad} = 15^\circ \quad \theta_{C1} = 1.0472 \text{ rad} = 60^\circ$$

know The rectangular form of the complex numbers is found from

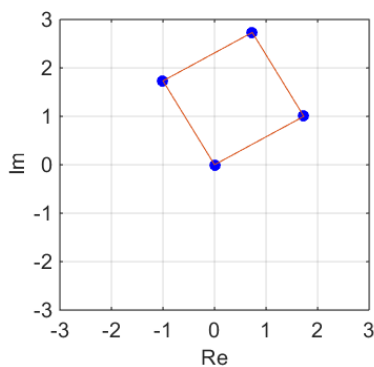
$$x = R \cos \theta \quad y = R \sin \theta$$

$$x_{A1} = 2 \cos(-0.5236) = 1.7320 \quad y_{A1} = 2 \sin(-0.5236) = -1.0000$$

$$x_{B1} = 2.8284 \cos(0.2618) = 2.7320 \quad y_{B1} = 2.8284 \sin(0.2618) = 0.7320$$

$$x_{C1} = 2 \cos(1.0472) = 1.0000 \quad y_{C1} = 2 \sin(1.0472) = 1.7321$$

The order pairs are A_1 (1.7320, -1.0000), B_1 (2.7320, 0.7320), C_1 (1.0000, 1.7321).



rotation by
 60° clockwise \rightarrow

